

© International Baccalaureate Organization 2023

All rights reserved. No part of this product may be reproduced in any form or by any electronic or mechanical means, including information storage and retrieval systems, without the prior written permission from the IB. Additionally, the license tied with this product prohibits use of any selected files or extracts from this product. Use by third parties, including but not limited to publishers, private teachers, tutoring or study services, preparatory schools, vendors operating curriculum mapping services or teacher resource digital platforms and app developers, whether fee-covered or not, is prohibited and is a criminal offense.

More information on how to request written permission in the form of a license can be obtained from <https://ibo.org/become-an-ib-school/ib-publishing/licensing/applying-for-a-license/>.

© Organisation du Baccalauréat International 2023

Tous droits réservés. Aucune partie de ce produit ne peut être reproduite sous quelque forme ni par quelque moyen que ce soit, électronique ou mécanique, y compris des systèmes de stockage et de récupération d'informations, sans l'autorisation écrite préalable de l'IB. De plus, la licence associée à ce produit interdit toute utilisation de tout fichier ou extrait sélectionné dans ce produit. L'utilisation par des tiers, y compris, sans toutefois s'y limiter, des éditeurs, des professeurs particuliers, des services de tutorat ou d'aide aux études, des établissements de préparation à l'enseignement supérieur, des fournisseurs de services de planification des programmes d'études, des gestionnaires de plateformes pédagogiques en ligne, et des développeurs d'applications, moyennant paiement ou non, est interdite et constitue une infraction pénale.

Pour plus d'informations sur la procédure à suivre pour obtenir une autorisation écrite sous la forme d'une licence, rendez-vous à l'adresse <https://ibo.org/become-an-ib-school/ib-publishing/licensing/applying-for-a-license/>.

© Organización del Bachillerato Internacional, 2023

Todos los derechos reservados. No se podrá reproducir ninguna parte de este producto de ninguna forma ni por ningún medio electrónico o mecánico, incluidos los sistemas de almacenamiento y recuperación de información, sin la previa autorización por escrito del IB. Además, la licencia vinculada a este producto prohíbe el uso de todo archivo o fragmento seleccionado de este producto. El uso por parte de terceros —lo que incluye, a título enunciativo, editoriales, profesores particulares, servicios de apoyo académico o ayuda para el estudio, colegios preparatorios, desarrolladores de aplicaciones y entidades que presten servicios de planificación curricular u ofrezcan recursos para docentes mediante plataformas digitales—, ya sea incluido en tasas o no, está prohibido y constituye un delito.

En este enlace encontrará más información sobre cómo solicitar una autorización por escrito en forma de licencia: <https://ibo.org/become-an-ib-school/ib-publishing/licensing/applying-for-a-license/>.

Chemistry

Higher level

Paper 1

11 May 2023

Zone A afternoon | Zone B morning | Zone C afternoon

1 hour

Instructions to candidates

- Do not open this examination paper until instructed to do so.
- Answer all the questions.
- For each question, choose the answer you consider to be the best and indicate your choice on the answer sheet provided.
- The periodic table is provided for reference on page 2 of this examination paper.
- The maximum mark for this examination paper is **[40 marks]**.

1. Which information does the molecular formula provide?
 - A. The simplest ratio of atoms in a molecule
 - B. The actual numbers of atoms in a molecule
 - C. The number of molecules in one mole
 - D. The types of bonds in a molecule

2. A student heated a known mass of zinc powder in an open crucible until there was no further mass change and recorded the final mass.

What would the student be able to derive from this data?

- I. Percentage composition of zinc oxide
 - II. Empirical formula of zinc oxide
 - III. Molecular formula of zinc oxide
- A. I and II only
 - B. I and III only
 - C. II and III only
 - D. I, II and III

3. What is the molar mass of a gas according to the following experimental data?

Mass of gas	40.0 g
Volume	220 cm ³
Temperature	17 °C
Pressure	98 kPa

Ideal gas constant = $8.31 \text{ J K}^{-1} \text{ mol}^{-1}$
 $PV = nRT$

- A. $\frac{40.0 \times 8.31 \times 290}{98 \times 0.220}$
- B. $\frac{98 \times 0.220}{40.0 \times 8.31 \times 290}$
- C. $\frac{40.0 \times 8.31 \times 17}{98 \times 0.220}$
- D. $\frac{98 \times 220}{40.0 \times 8.31 \times 17}$
4. What is the maximum number of electrons in energy level $n = 4$?
- A. 8
- B. 18
- C. 32
- D. 50
5. Which statement best explains the first ionization energy of sulfur being lower than that of phosphorus?
- A. Sulfur has more protons than phosphorus.
- B. Phosphorus does not have paired electrons in the outer p sub-level.
- C. Sulfur has an unpaired electron in the outer p sub-level.
- D. Phosphorus is more reactive than sulfur.

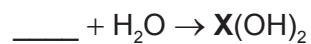
6. What can be deduced from the period number of an element?

- I. Highest occupied energy level
- II. Number of sub-levels in the outer shell
- III. Number of outer electrons

- A. I and II only
- B. I and III only
- C. II and III only
- D. I, II and III

7. In the following unbalanced equation, **X** represents an element.

Which oxide reacts with water as shown?



- A. Na_2O
- B. MgO
- C. NO_2
- D. SO_3

8. Which element is not a transition metal?

- A. Cr
- B. Mn
- C. Ni
- D. Zn

9. Which substance is likely to have an ionic lattice structure at 298 K and 100 kPa?

	Melting point	Conducts electricity in a liquid state?
A.	low	yes
B.	low	no
C.	high	no
D.	high	yes

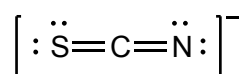
10. Why does the melting point of the elements decrease down group 1?

- A. Atomic mass increases
- B. Number of electrons increases
- C. Radius of metal ion increases
- D. First ionization energy decreases

11. In which molecule does the central atom have an incomplete octet of electrons?

- A. H_2Se
- B. PH_3
- C. OF_2
- D. BF_3

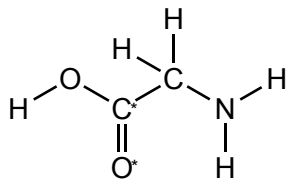
12. What are the formal charges on the atoms in this molecular ion?



	S	C	N
A.	–1	0	0
B.	0	0	–1
C.	–1	+1	0
D.	0	+1	–1

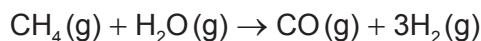
13. Which types of hybridization are present in glycine?

Glycine



	C*	N	O*
A.	sp ²	sp ³	sp ²
B.	sp ²	sp ³	sp
C.	sp	sp ²	sp ²
D.	sp	sp ²	sp

14. What is the enthalpy change for the following reaction?

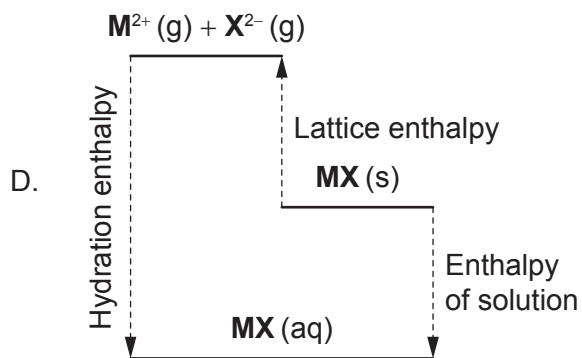
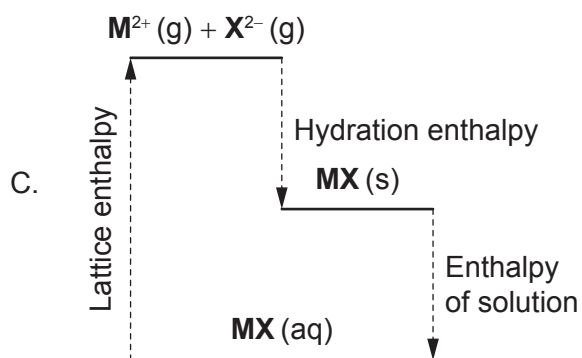
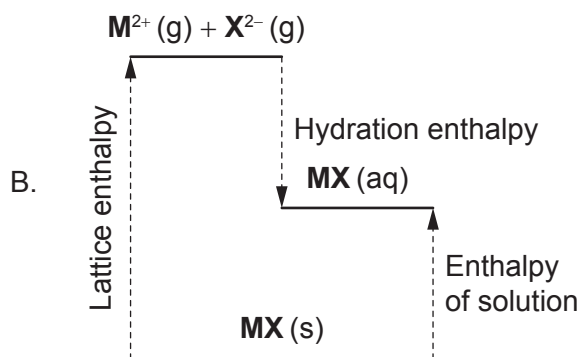
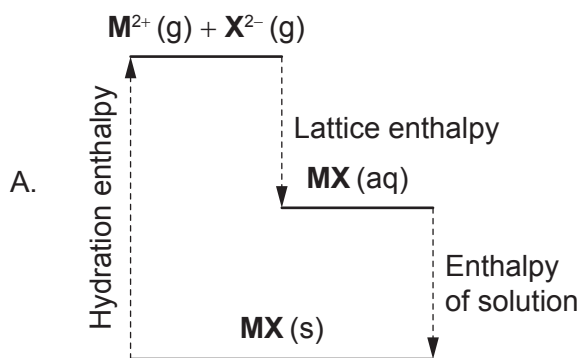


Reaction	ΔH^\ominus
$2\text{C}_{(\text{graphite})} + \text{O}_2(\text{g}) \rightarrow 2\text{CO}(\text{g})$	-222 kJ mol^{-1}
$\text{C}_{(\text{graphite})} + 2\text{H}_2(\text{g}) \rightarrow \text{CH}_4(\text{g})$	-74 kJ mol^{-1}
$2\text{H}_2(\text{g}) + \text{O}_2(\text{g}) \rightarrow 2\text{H}_2\text{O}(\text{g})$	-484 kJ mol^{-1}

- A. $-74 - 242 + 111$
 B. $+74 + 242 - 111$
 C. $-74 - 484 - 222$
 D. $+74 + 484 - 222$
15. Which allotrope, oxygen or ozone, has the stronger bond between O atoms, and which absorbs higher frequency UV radiation in the atmosphere?

	Stronger bond between O atoms	Absorbs higher frequency UV
A.	ozone	ozone
B.	ozone	oxygen
C.	oxygen	oxygen
D.	oxygen	ozone

16. Which diagram shows the enthalpy changes for dissolving a solid, **MX**, in water, if the process increases the temperature of the solution?



17. What is the correct combination of ΔH^\ominus and ΔS^\ominus for a reaction which is only spontaneous at high temperature?

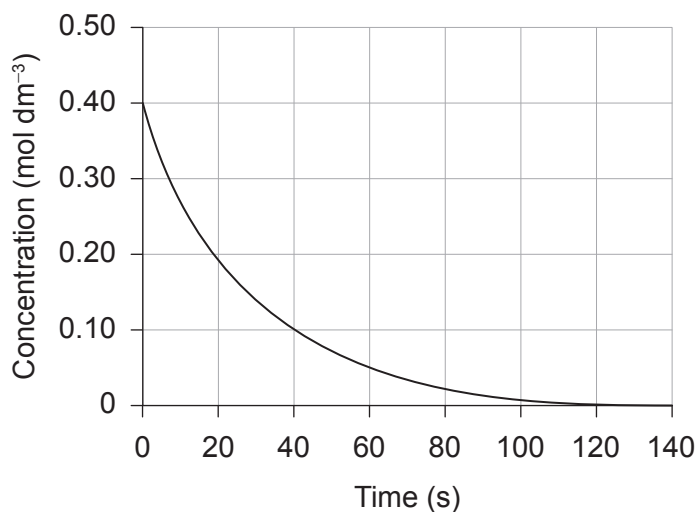
	ΔH^\ominus	ΔS^\ominus
A.	+	+
B.	+	-
C.	-	+
D.	-	-

18. What happens to the average kinetic energy, KE, of the particles in a gas when the absolute temperature is doubled?

$$\text{KE} = \frac{1}{2} mv^2$$

- A. Increases by a factor of 2
B. Decreases by a factor of 2
C. Increases by a factor of 4
D. Decreases by a factor of 4

19. Which calculation determines the initial rate of this reaction?



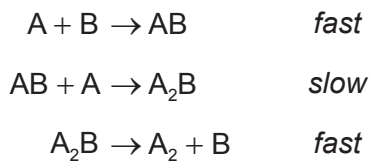
A. $\frac{0.40 - 0.19}{20 - 0}$

B. $\frac{0.40 - 0.10}{40 - 0}$

C. $\frac{0.40 - 0}{140 - 0}$

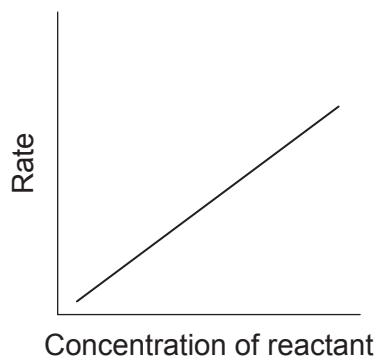
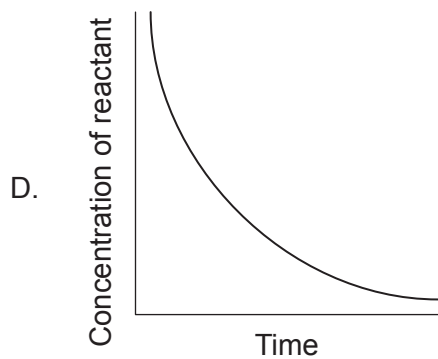
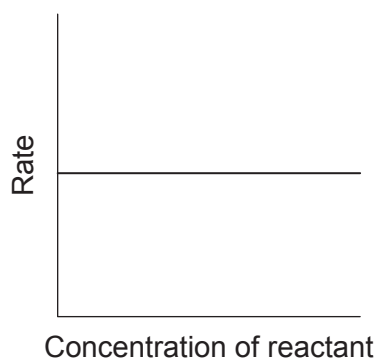
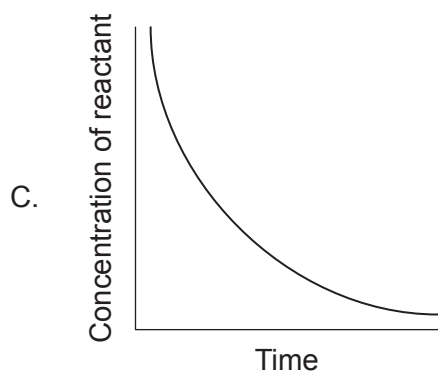
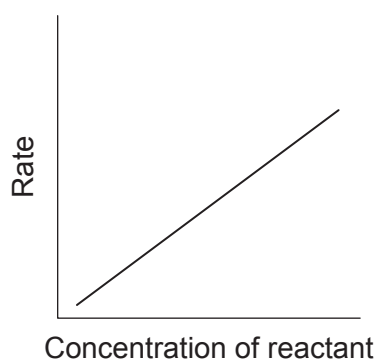
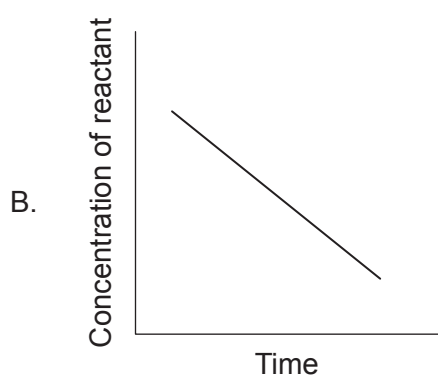
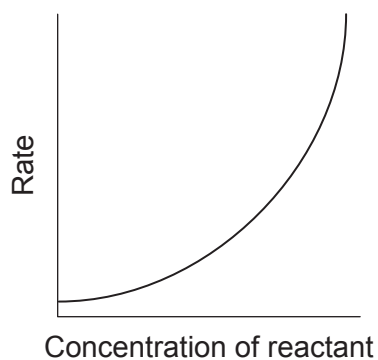
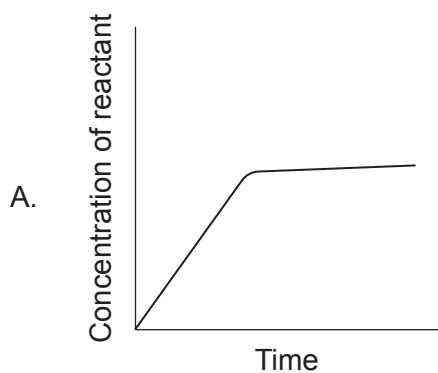
D. $\frac{0.40 - 0.20}{10 - 0}$

20. What is the order of reaction with respect to A, given the following reaction mechanism?

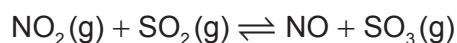


- A. 0
- B. 1
- C. 2
- D. 3

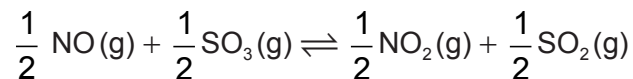
21. Which pair of graphs indicate the same order of reaction?



22. This reaction has an equilibrium constant $K_c = 650$ at a certain temperature.



What is the equilibrium constant for the following reaction at the same temperature?



- A. $\sqrt{650}$
- B. $\frac{1}{650}$
- C. $\frac{1}{\sqrt{650}}$
- D. $\frac{1}{2} \times 650$
23. Which equilibrium constant corresponds to the spontaneous reaction with the most negative value of ΔG^\ominus ?
- A. 4.9×10^{-3}
- B. 8.2×10^{-3}
- C. 4.9×10^2
- D. 8.2×10^2
24. Which products are formed from the neutralization of nitric acid by calcium hydroxide?
- A. Calcium oxide and ammonia
- B. Calcium nitrate and water
- C. Calcium nitrate and ammonia
- D. Calcium nitrate and hydrogen

25. Which combination describes a strong Brønsted–Lowry acid?

	Proton donor	Conjugate base
A.	good	strong
B.	good	weak
C.	poor	strong
D.	poor	weak

26. What is the relationship between acid and base dissociation constants in a conjugate acid–base pair?

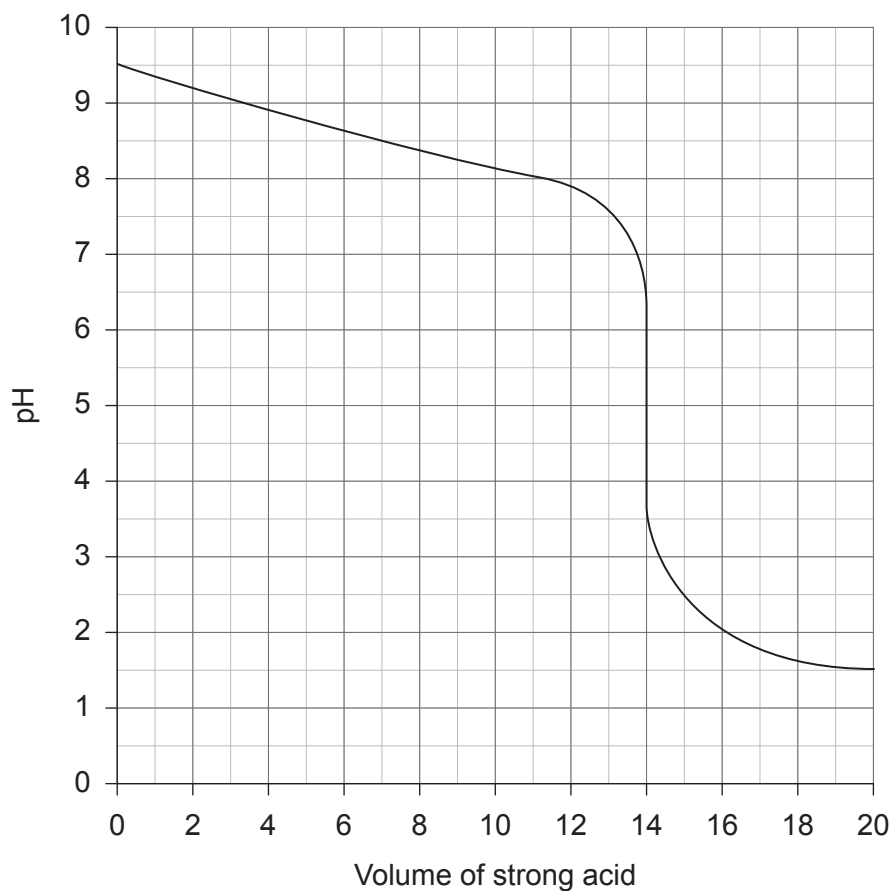
A. $K_a \times K_b = K_w$

B. $\frac{K_a}{K_b} = K_w$

C. $pK_a \times pK_b = pK_w$

D. $\frac{pK_a}{pK_b} = pK_w$

27. What is the pH at the equivalence point in this titration?



- A. 8.5
- B. 7.0
- C. 5.0
- D. 1.5

28. Which change involves oxidation of N?

- A. NH_3 to N_2
- B. NO_2 to NO
- C. N_2 to AlN
- D. NO_2 to N_2O_4

29. Which combination describes an electrolytic cell?

	Energy change	Spontaneity
A.	chemical to electrical	non-spontaneous
B.	electrical to chemical	non-spontaneous
C.	chemical to electrical	spontaneous
D.	electrical to chemical	spontaneous

30. What is the standard potential difference of this cell?



Reaction	E^{\ominus}
$\text{Fe}^{2+} \text{ (aq)} + 2\text{e}^{-} \rightleftharpoons \text{Fe (s)}$	–0.45 V
$\text{Ag}^{+} \text{ (aq)} + \text{e}^{-} \rightleftharpoons \text{Ag (s)}$	+0.80 V

- A. $0.45 + 2(0.80)$
- B. $0.45 + 0.80$
- C. $-0.45 - 2(0.80)$
- D. $-0.45 - 0.80$

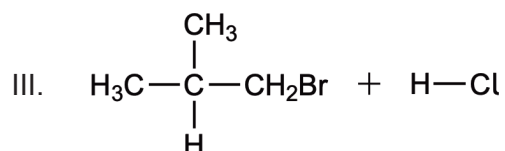
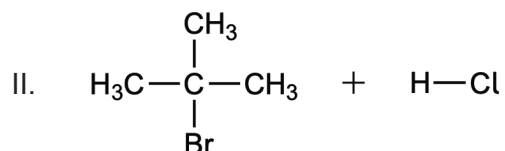
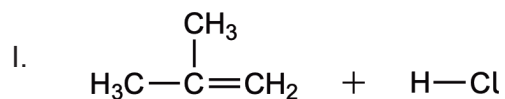
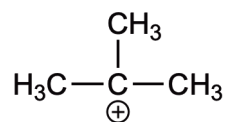
31. Which statement is correct about the ions in a cell assembled from these half-cells?

Reaction	E^{\ominus}
$\text{Ni}^{2+} \text{ (aq)} + 2\text{e}^{-} \rightleftharpoons \text{Ni (s)}$	–0.26 V
$\text{Zn}^{2+} \text{ (aq)} + 2\text{e}^{-} \rightleftharpoons \text{Zn (s)}$	–0.76 V

- A. Negative ions flow into the zinc half-cell from the salt bridge.
- B. Negative ions flow into the nickel half-cell from the salt bridge.
- C. Zn^{2+} ions are reduced to Zn.
- D. The concentration of Ni^{2+} ions increases.

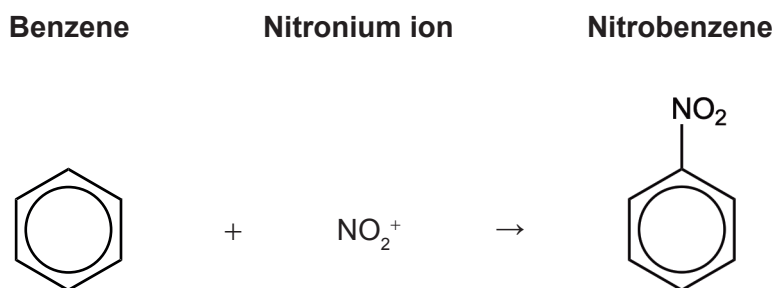
32. Which formula represents an ether?
- A. C_6H_5OH
 - B. CH_3CHO
 - C. CH_3COCH_3
 - D. CH_3OCH_3
33. Why does benzene undergo substitution more readily than addition?
- A. Benzene is unsaturated.
 - B. Addition could produce an alkane.
 - C. Resonance makes carbon–carbon bonds too strong to break.
 - D. A benzene molecule is planar.
34. What is the product of the reaction of but-2-ene with bromine?
- A. 1,2-dibromobutane
 - B. 2,2-dibromobutane
 - C. 2,3-dibromobutane
 - D. 3,3-dibromobutane
35. Which molecule is optically active?
- A. 2,2-dichloropropane
 - B. 1,2-dichloropropane
 - C. 1,3-dichloropropane
 - D. 1,2,3-trichloropropane

36. Which pairs of reactants could produce the following intermediate?



- A. I and II only
- B. I and III only
- C. II and III only
- D. I, II and III

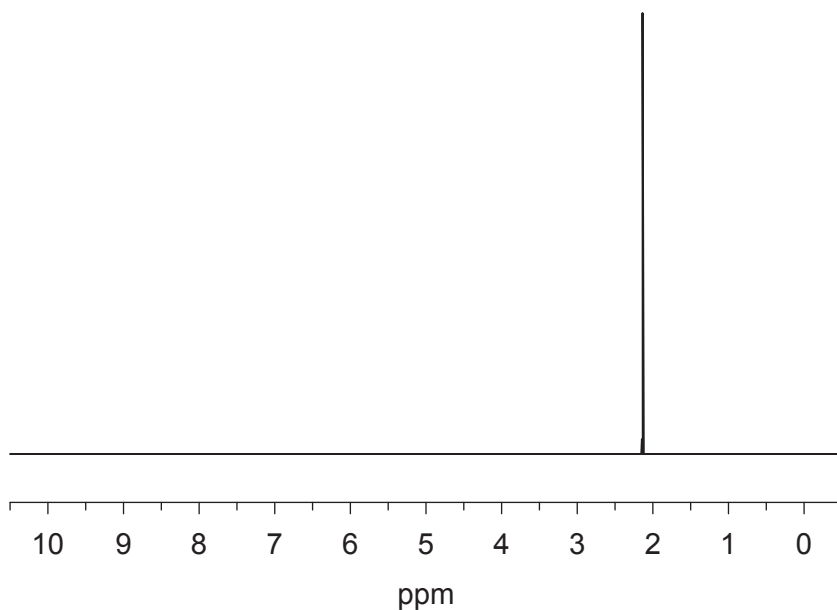
37. Which terms describe the nitronium ion in the nitration of benzene?



	Type of reactant	Acid-base nature
A.	nucleophile	Lewis base
B.	nucleophile	Lewis acid
C.	electrophile	Lewis base
D.	electrophile	Lewis acid

38. What is the percentage error if the enthalpy of combustion of a substance is determined experimentally to be $-2100 \text{ kJ mol}^{-1}$, but the literature value is $-3500 \text{ kJ mol}^{-1}$?
- A. 80 %
 - B. 60 %
 - C. 40 %
 - D. 20 %

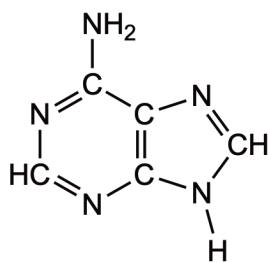
39. Which molecule produces this $^1\text{H-NMR}$ spectrum?



- A. $\text{CH}_3\text{COOCH}_3$
- B. CH_3COCH_3
- C. CH_3CHO
- D. $\text{CH}_3\text{CH}_2\text{CH}_3$

40. What is the index of hydrogen deficiency of adenine?

Adenine (C₅H₅N₅)



- A. 3
 - B. 4
 - C. 5
 - D. 6
-

Disclaimer:

Content used in IB assessments is taken from authentic, third-party sources. The views expressed within them belong to their individual authors and/or publishers and do not necessarily reflect the views of the IB.

References:

39. SDBS, National Institute of Advanced Industrial Science and Technology.

All other texts, graphics and illustrations © International Baccalaureate Organization 2023